



INDIAN SCHOOL NIZWA - WORKSHEET




MATHEMATICS CH- 4 SUBTRACTION

Name: _____

Date: _____

Class: I Sec: _____




1. Subtract and fill in the blanks :

(a)   

9 balls 2 balls roll away 7 balls left

From **9** take away **2** left **7**

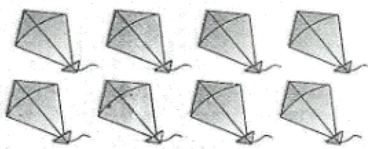
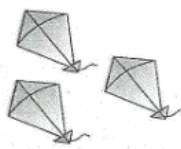
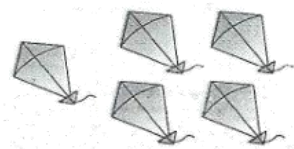
9 - **2** = **7**

(b)   

10 Strawberries 4 eaten by a boy are left

From take away left

- =









(c)   

8 kites 3 kites blew away are left

From take away left

- =

2. Cross out. Subtract. Write how many are left?

	$\begin{array}{r} 10 \\ - 3 \\ \hline 7 \end{array}$		$\begin{array}{r} 12 \\ - 4 \\ \hline \end{array}$
			
	$\begin{array}{r} 12 \\ - 6 \\ \hline \end{array}$		$\begin{array}{r} 16 \\ - 9 \\ \hline \end{array}$
			



INDIAN SCHOOL NIZWA - WORKSHEET

3. Subtract vertically :

$\begin{array}{r} 8 \\ - 1 \\ \hline \end{array}$	$\begin{array}{r} 9 \\ - 3 \\ \hline \end{array}$	$\begin{array}{r} 7 \\ - 2 \\ \hline \end{array}$	$\begin{array}{r} 8 \\ - 0 \\ \hline \end{array}$	$\begin{array}{r} 10 \\ - 2 \\ \hline \end{array}$
---	---	---	---	--

4. Solve by counting back :

$8 - 3 =$ <input type="text"/>	$9 - 2 =$ <input type="text"/>
$10 - 4 =$ <input type="text"/>	$7 - 1 =$ <input type="text"/>

5. Match the problems with the same answer :

$9 - 4$	$7 - 5$
$8 - 2$	$10 - 7$
$7 - 3$	$6 - 1$
$6 - 4$	$9 - 3$
$5 - 2$	$8 - 4$

6. Fill in the blanks :

(a) 2 less than 6 is

(b) 4 less than 9 is

(c) less than 8 is 3

(d) 1 less than 4 is

(e) 7 3 is 4.